


Teacher: _____
 Session: _____

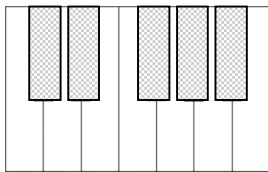
Review Test D

Name: _____

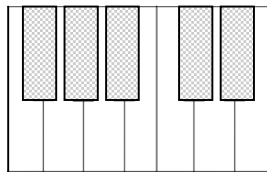
1. Label the intervals below. Your options are: Unison, 2nd, 3rd, 4th, and 5th.



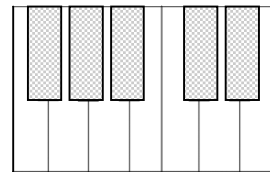
2. Label the five keys used for each five-finger pattern on each keyboard below by writing the correct alphabet letter on the key.



D major



A major

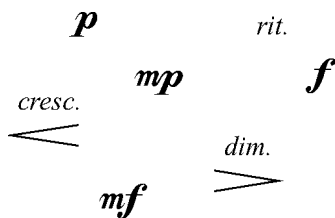


F Major

3. Name the notes below. Don't forget the accidentals! (example: G#)



4. Match the each symbol on the left to its name on the right.



diminuendo *forte*
crescendo *piano*
mezzo piano *mezzo forte*
 ritardando

5. Identify the time signature of each example below as 2/4 time, 3/4 time, or 4/4 time.

